



S.N.B.P.'s International School

ICT Worksheet 1 – Class 4

Date: 24-Apr-2020

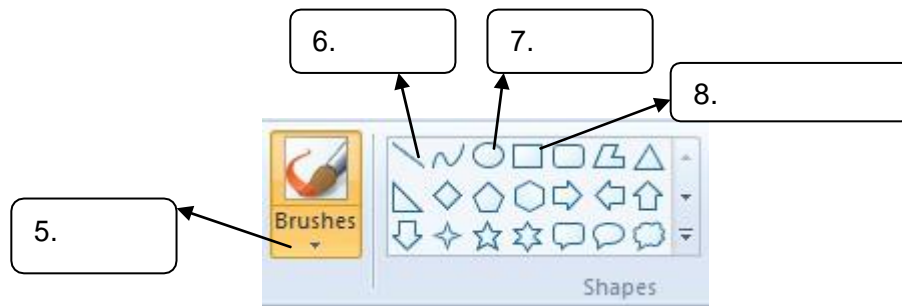
Q1. Fill in the blanks:

1. _____ is the most popular operating System that is being used today.
2. Windows 7 is the latest version of operating System developed by _____
3. The small pictures on the desktop are _____
4. First stable screen that appears after switching on the computer is called the _____
5. Long bar at the bottom of the desktop that contains the start button at the left corner is called the _____
6. The _____ menu, lists all the installed programs in the computer.
7. Small arrow that appears on the desktop is called _____

Q2. Label the different parts of the given screen:

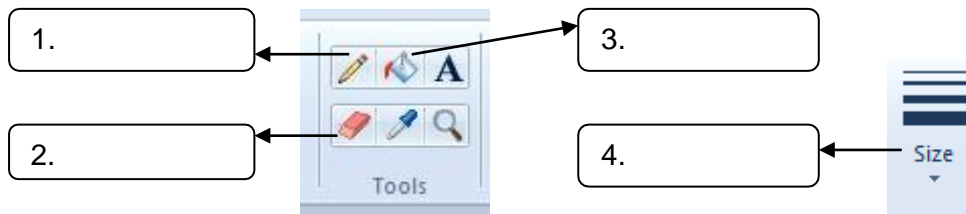


O3. Choose the correct answers from the hints given and write in front of the picture :



Hints:

1. Fill with color tool
2. Pencil tool
3. Oval tool
4. Eraser tool
5. Size tool
6. Line tool
7. Rectangle tool
8. Brush tool



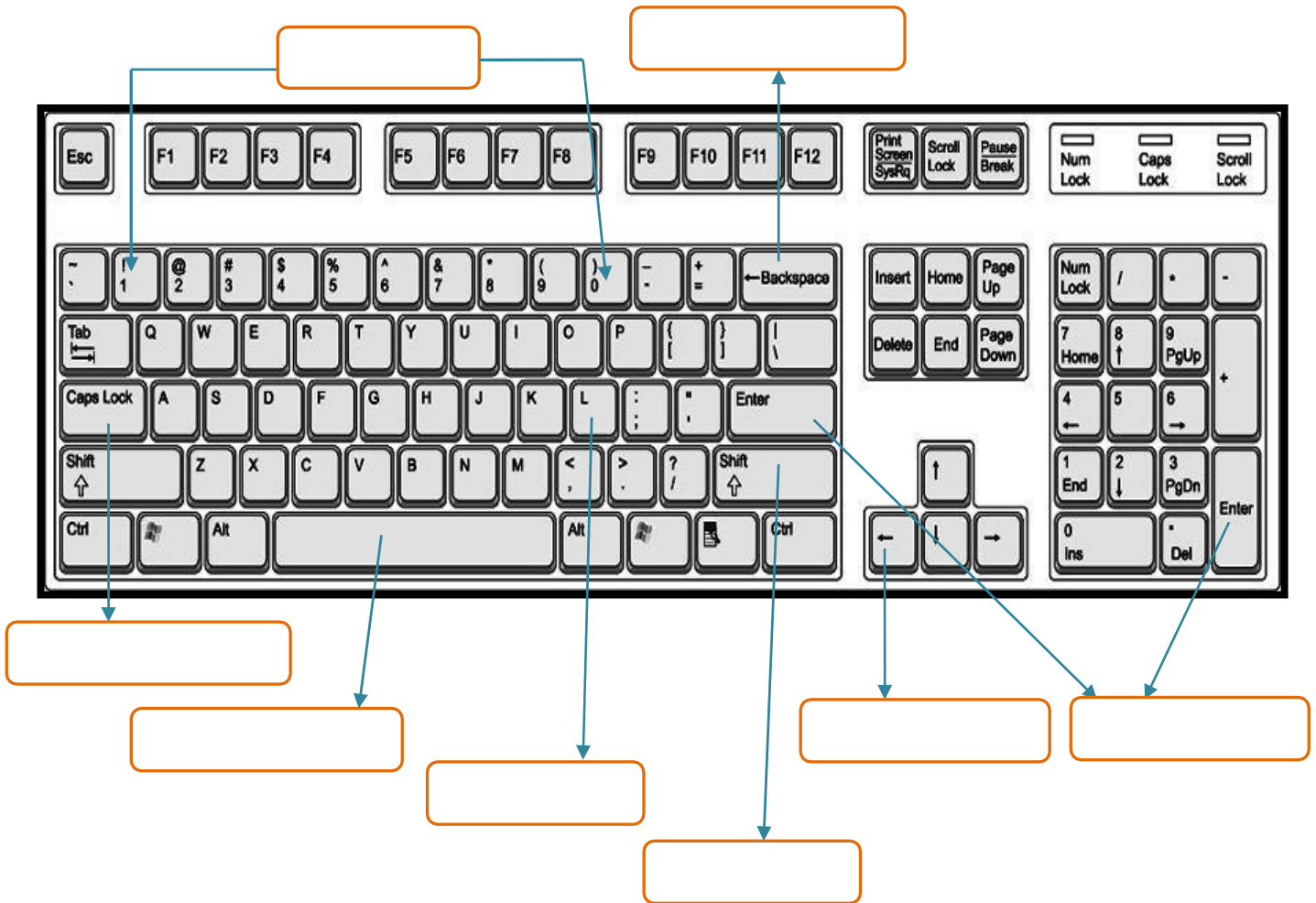
O4. Answer in one word using the hints given in the box:

1. Which tool is used to fill colour in an object?
2. Which tool is used to draw rectangles and squares?
3. Which tool is used to draw circles?
4. Which tool is used to draw lines?
5. Which tool is used to erase the drawing?
6. Which button is used to change the thickness of a line?
7. Which key is used to draw a straight line?

Hints:

1. Fill with color tool
2. Oval tool
3. Eraser tool
4. Shift key
5. Size tool
6. Line tool
7. Rectangle tool

Q5. Write the names of keys given in the following figure:



Q6. Match the following:

- | | |
|--------------------------|------------------------|
| 1. RAM | 1 KB |
| 2. ROM | Rey Johnson |
| 3. 1024 Bytes | Non-Volatile in nature |
| 4. Inventor of Hard Disk | Volatile Memory |

Q7. Write the full forms for the following abbreviations

- 1) RAM _____
- 2) ROM _____
- 3) CD _____
- 4) DVD _____

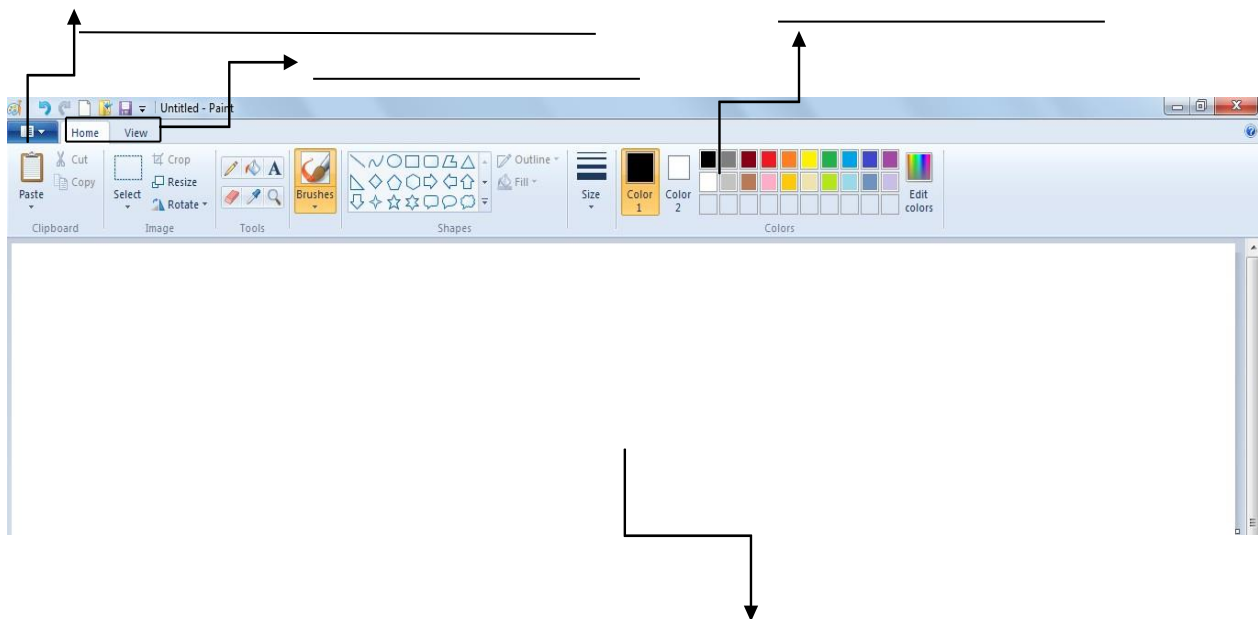
5) MB _____

6) KB _____

7) GB _____

8) TB _____

Q8. Label the screen.



Q9. Tell the keyboard keys used to

a. Copy _____

b. Paste _____

c. Cut _____

d. Save _____

Q10. Name the given tools.

